

**Solve each problem.****Answers**

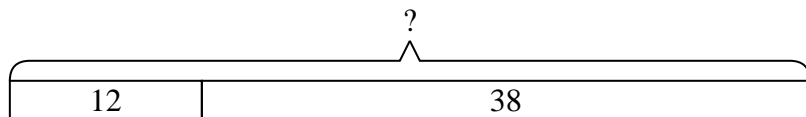
- 1) A pet store had 12 kittens. If they got another 38 kittens, how many would they have total?
- 2) There were 31 people in line at lunch when 31 more got in line. How many people were there total in line?
- 3) Kristine had \$24 and Tiffany had \$15. If they combined their money, how much would they have?
- 4) For a party Will spent 45 dollars on food and 21 dollars on drinks. How much did Will spend total?
- 5) A store sold 33 cold drinks and 10 hot drinks. How many drinks did they sell total?
- 6) Luke collected 18 cans to recycle on Monday and 49 more on Tuesday. How many cans did Luke collect all together?
- 7) For Halloween Oliver got 15 ounces of candy and Bianca got 32 ounces of candy. What is the combined weight they received?

1. \_\_\_\_\_
2. \_\_\_\_\_
3. \_\_\_\_\_
4. \_\_\_\_\_
5. \_\_\_\_\_
6. \_\_\_\_\_
7. \_\_\_\_\_

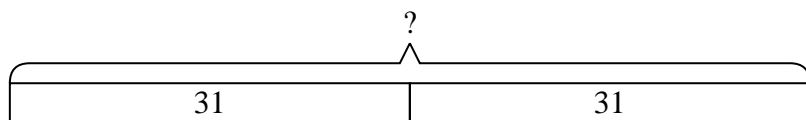


Solve each problem.

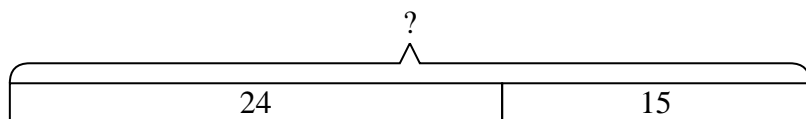
- 1) A pet store had 12 kittens. If they got another 38 kittens, how many would they have total?



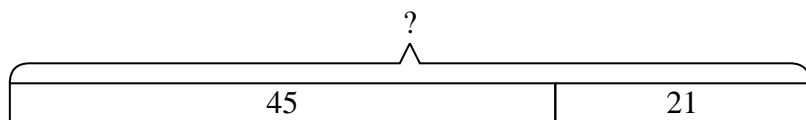
- 2) There were 31 people in line at lunch when 31 more got in line. How many people were there total in line?



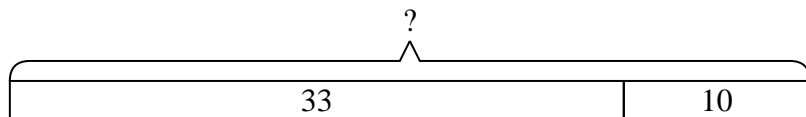
- 3) Kristine had \$24 and Tiffany had \$15. If they combined their money, how much would they have?



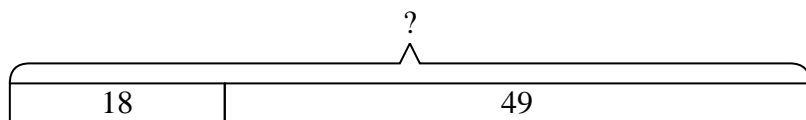
- 4) For a party Will spent 45 dollars on food and 21 dollars on drinks. How much did Will spend total?



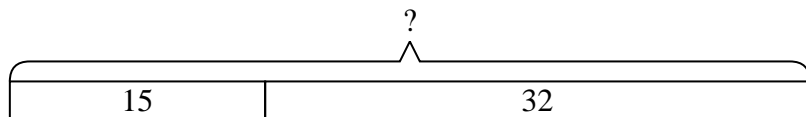
- 5) A store sold 33 cold drinks and 10 hot drinks. How many drinks did they sell total?



- 6) Luke collected 18 cans to recycle on Monday and 49 more on Tuesday. How many cans did Luke collect all together?



- 7) For Halloween Oliver got 15 ounces of candy and Bianca got 32 ounces of candy. What is the combined weight they received?

**Answers**

1. **50**
2. **62**
3. **39**
4. **66**
5. **43**
6. **67**
7. **47**